


Name: Enrolment No:	
--------------------------------------	--

UNIVERSITY OF PETROLEUM AND ENERGY STUDIES
End Semester Examination, December 2022

Course: Formal Languages & Automata Theory
Semester: III
Program: B.Tech CSE (Hons.) All Branches
Time : 03 hrs.
Course Code: CSEG 2035P

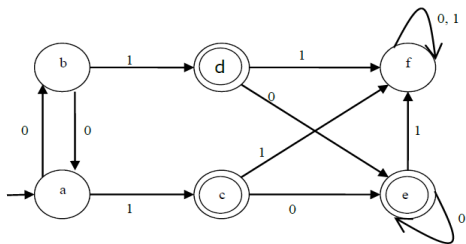
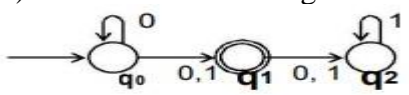
Max. Marks: 100

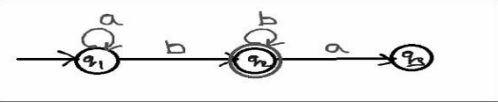
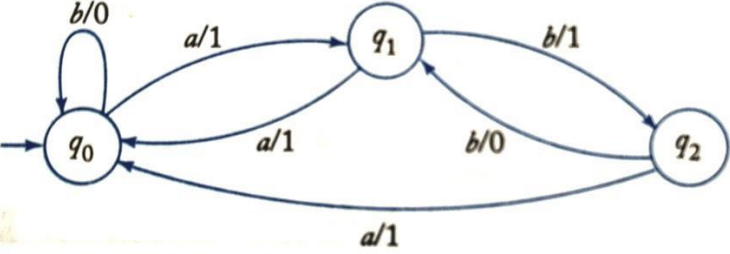
Instructions:

SECTION A
(5Qx4M=20Marks)

S. No.	Question	Marks	CO
Q 1	Prove that the complement of a regular language is also regular.	4	CO2
Q 2	Construct a DFA for the language over $\{0, 1\}^*$ such that it contains "000" as a substring.	4	CO1
Q 3	Construct a ϵ -NFA for the following regular expression. $(0+1)^*(00+11)(0+1)^*$	4	CO2
Q 4	State the pumping lemma for regular languages. Discuss the applications of regular expression?	4	CO2
Q 5	State the relations among regular expression, deterministic finite automata, non-deterministic finite automaton and finite automaton with epsilon transition.	4	CO1

SECTION B
(4Qx10M= 40 Marks)

Q 6	<p>a) Minimize the DFA shown in the following diagram.</p>  <p>b) Convert the following NFA into an equivalent DFA.</p> 	10	CO1
-----	--	-----------	------------

Q 7	<p>Construct a regular expression for the given finite automata using state elimination method.</p> 	10	CO2
Q 8	<p>Convert the following grammar into an equivalent one with no unit productions and no useless symbols $S \rightarrow ABA$, $A \rightarrow aAA aBC bB$, $B \rightarrow A bB Cb$, $C \rightarrow CC Cc$</p>	10	CO3
Q 9	<p>Convert the Mealy machine into equivalent Moore machine.</p> 	10	CO1
<p>SECTION-C (2Qx20M=40 Marks)</p>			
Q 10	<p>a) Design a PDA automata which accepts $L = \{0^n 1^n \mid n \geq 1\}$. b) Design a PDA for the grammar: $S \rightarrow aABC$ $A \rightarrow aB a$ $B \rightarrow bA b$ $C \rightarrow a$</p>	20	CO3
Q 11	<p>a) Design a Turing Machine that recognizes the language consisting of all strings of 0's whose length is a power of 2 i.e. $L = \{0^{2^m} \mid m \geq 0\}$. b) Write short notes on the following: i) Recursive and Recursive enumerable language ii) Decidable and undecidable language</p>	20	CO4